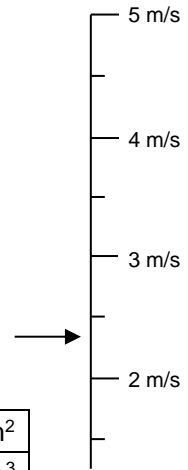


Measurement Revision

Show working on the back of the sheet for the questions marked with a *.

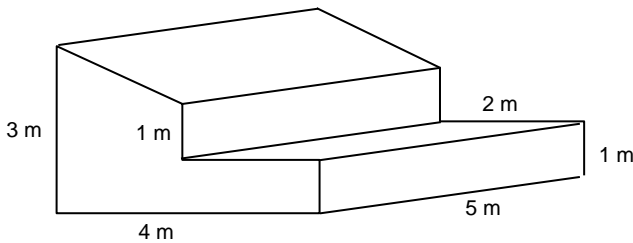
- Write the name and abbreviation for the metric unit which is closest to: (7Ma)
 the area of a finger nail
 the volume of a wardrobe



- Read the scale to the right (8Ma)
- Find the perimeter of a rectangle 12 m by 8 m (8Mb)
- Complete the following table.

cm ²	4 m ²	ha	km ²
L	mL	cm ³	0.04 m ³

- * Find the surface area of a cylinder with diameter 2 m and height 8.5 m
- * Find the volume of this shape

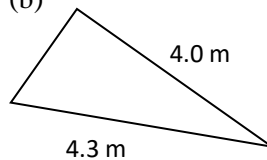


- * Find the length of the third side of these two right-angle triangles

(a)



(b)

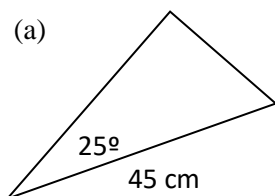


- Find the gradient of each of the following lines .. (a) (b)

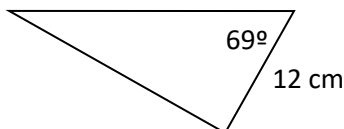


- * Find all the unmarked sides and angles in the following right-angle triangles.

(a)



(b)



(c)

