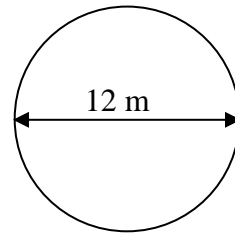
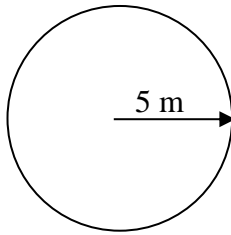
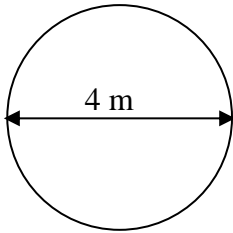
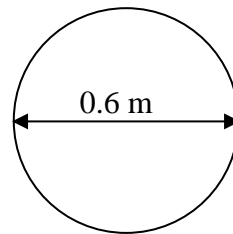
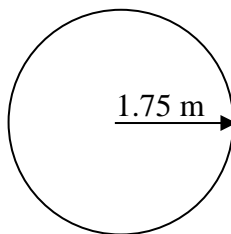
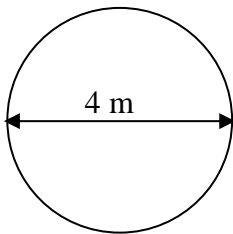


Circumference and Area of a Circle

1. Find the approximate circumference and area of each of these circles, using $\pi \approx 3$.



2. Find the circumference and area of each of these circles using either $\pi \approx 3.14$ or by using the π button on a calculator.



3. Find the circumference and area of the circle below by first measuring.

