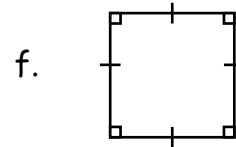
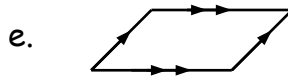
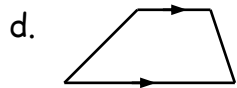
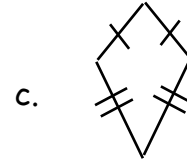
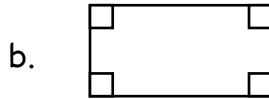
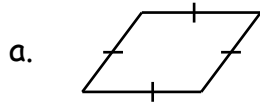


## Who Am I?

For each shape, give as many names as you can. Then circle the name that best describes it.



## Some Geometry Terms

<b>polygon</b>	A closed 2-D shape made of line segments.
<b>regular polygon</b>	A polygon with congruent sides and congruent angles.
<b>quadrilateral</b>	A polygon with 4 sides.
<b>trapezoid</b>	A quadrilateral with exactly one pair of parallel sides.
<b>parallelogram</b>	A quadrilateral with opposite sides being parallel.
<b>rhombus</b>	A parallelogram with all sides congruent.
<b>kite</b>	A quadrilateral in which pairs of adjacent sides are congruent.
<b>rectangle</b>	A quadrilateral with a right angle at every vertex.
<b>square</b>	A rectangle with all sides congruent.