

Draw up a table of values for each of the following relations:

1. $y = x + 3$

X					
y					

2. $y = 2x + 1$

X					
y					

3. $y = 3x + 2$

X					
y					

4. $y = 2x - 4$

X					
y					

5. $y = 12 - 2x$

X					
y					

6. $y = 4x + 2$

X					
y					

7. $y = 5 - x$

X					
y					

8. $y = 5x - 1$

X					
y					

9. $y = 20 - 3x$

X					
y					

10. $y = 2x + 11$

X					
y					

11. $y = 5x + 9$

X					
y					

12. $y = 4x + 1$

X					
y					

13. $y = 3x - 2$

X					
y					


14. $y = 7 - 2x$

X					
y					

Plot the dots in the correct place using the values tables in the following graphs:


1

X	0	1	2	3	
y	1	3	5	7	




2

X	0	1	2	3	
y	-5	-2	1	4	




3

X	0	1	2	3	4
y	-3	-2	-1	0	1




X	0	1	2	3	
y	7	8	9	10	

4



X	0	1	2	3	
y	-2	2	6	10	

5



X	0	1	2	3	
y	2	5	8	11	

6

